




Temperatur


► Skriv med siffror hur många grader termometern visar.




_____ °C












► Fyll i termometern så den visar rätt temperatur.




18 °C




24 °C



-7 °C



-11 °C



-22 °C

► Vad visar termometer D om temperaturen

- a) stiger 3°C _____ b) sjunker 3°C _____

► Vad visar termometer B om temperaturen

- a) stiger 5°C _____ b) sjunker 5°C _____

